



Name: _____

Worksheet: 03

Class: Ukg

Subject: Maths

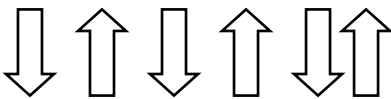
Date: / /2020

Q1. Write numbers 161 to 180 .

Q2. Complete the pattern .

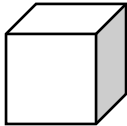


11 22 11 22 11 22




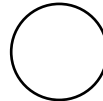
Q3. Write notation 21 to 30 .

Q4. Match the shapes to the similar shaped objects .



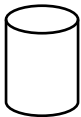
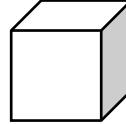
.

.




.

.



.

.

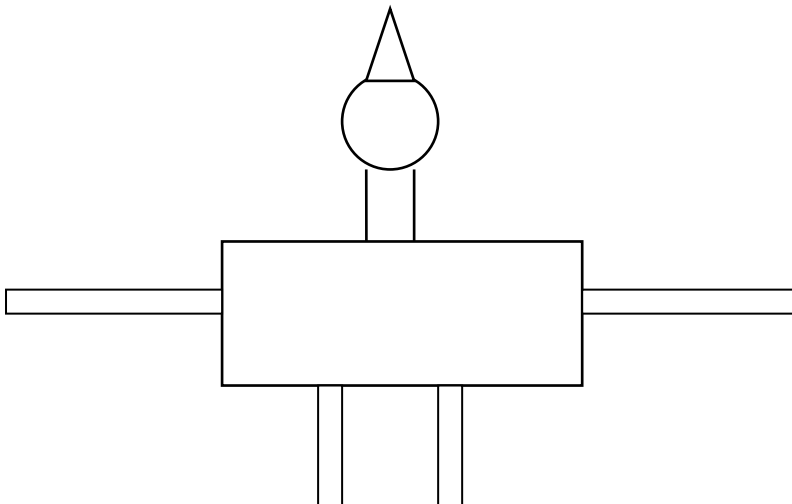


.

.



Q5. Draw the following picture and paste colourful waste paper by sticking on it.





Name: _____

Worksheet: 04

Class: Ukg

Subject: Maths

Date: / /2020

Q1. Arrange the numbers in correct ascending order.

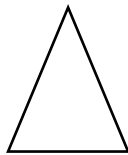

7, 8, 6, 9 .

31, 30, 33, 32 .

48, 46, 47, 49, 50 .




Q2. Write numbers 181 to 200.

Q3. Circle the biggest object .



Q4. Write notation 31 to 40 .

Q5. Count the number in each group. Write the correct sign (< , > , =) in the box.



Q6. Draw 3 fish and decorate it with pencil waste .